

<https://edu.academy>

Plateforme éducative





?



?




?



?

$$? + ? + ? + ? = ?$$

- |    |    |    |    |    |    |    |    |    |    |    |   |
|----|----|----|----|----|----|----|----|----|----|----|---|
| 0  | 1  | 2  | 3  | 4  | 5  | 6  | 7  | 8  | 9  | +  | - |
| 10 | 11 | 12 | 13 | 14 | 15 | 16 | 17 | 18 | 19 | 20 | = |



$$? + ? + ? + ? = ?$$

- |    |    |    |    |    |    |    |    |    |    |    |   |
|----|----|----|----|----|----|----|----|----|----|----|---|
| 0  | 1  | 2  | 3  | 4  | 5  | 6  | 7  | 8  | 9  | +  | - |
| 10 | 11 | 12 | 13 | 14 | 15 | 16 | 17 | 18 | 19 | 20 | = |



$$? + ? + ? + ? = ?$$

- |    |    |    |    |    |    |    |    |    |    |    |   |
|----|----|----|----|----|----|----|----|----|----|----|---|
| 0  | 1  | 2  | 3  | 4  | 5  | 6  | 7  | 8  | 9  | +  | - |
| 10 | 11 | 12 | 13 | 14 | 15 | 16 | 17 | 18 | 19 | 20 | = |



$$? - ? = ?$$



$$? - ? = ?$$



$$? - ? = ?$$

0 1 2 3 4 5 6 7 8 9 + -

10 11 12 13 14 15 16 17 18 19 20 =

0 1 2 3 4 5 6 7 8 9 + - =


9 = 9 - 0

6 = 9 - 3

9 = 9 - 0

$$2 + ? = 5$$

$$? + 3 = 8$$




$$? + 2 = 4$$

$$? + 1 = 6$$

$$6 + ? = 12$$

$$? - 3 = 7$$









0 1 2 3 4 5 6 7 8 9 + -




10 11 12 13 14 15 16 17 18 19 20 =

0 1 2 3 4 5 6 7 8 9 + - =

+	-	+	-
+	-	+	-
+	-	+	-
+	-	+	-

1.  +  = 

2.  +  = 

3.  +  = 

0	1	2	3	4	5	6	7	8	9	+	-	
10	11	12	13	14	15	16	17	18	19	20	=	
0	1	2	3	4	5	6	7	8	9	+	-	=

6	3
6	2
7	1



$$? + ? = ?$$



$$? + ? = ?$$



$$? + ? = ?$$

0 1 2 3 4 5 6 7 8 9 + -  
10 11 12 13 14 15 16 17 18 19 20 =

0 1 2 3 4 5 6 7 8 9 + - =

$$6 = 5 + 1$$

$$9 = 5 + 4$$

$$6 = 2 + 4$$





$$? + ? = ?$$



$$? + ? = ?$$




$$? + ? = ?$$

0 1 2 3 4 5 6 7 8 9 + -  
10 11 12 13 14 15 16 17 18 19 20 =  
0 1 2 3 4 5 6 7 8 9 + - =

0 = 1 + 9  
1 = 2 + 9  
2 = 3 + 9



0 1 2 3 4 5 6 7 8 9 + -  
10 11 12 13 14 15 16 17 18 19 20 =  
0 1 2 3 4 5 6 7 8 9 + - =



0 1 2 3 4 5 6 7 8 9 + -

10 11 12 13 14 15 16 17 18 19 20 =

0 1 2 3 4 5 6 7 8 9 + - =

A small grid of icons for a calculator interface. It contains two rows of icons. The top row has a green circle with the number 6, a blue circle with the number 4, a blue circle with the number 7, and a blue circle with the number 6. The bottom row has a red circle with a question mark, a blue circle with a plus sign, and a blue circle with a minus sign.



0 1 2 3 4 5 6 7 8 9 + -  
10 11 12 13 14 15 16 17 18 19 20 =  
0 1 2 3 4 5 6 7 8 9 + - =



0 1 2 3 4 5 6 7 8 9 + -

10 11 12 13 14 15 16 17 18 19 20 =

0 1 2 3 4 5 6 7 8 9 + - =



$$? + ? + ? + ? = ?$$

- |    |    |    |    |    |    |    |    |    |    |    |   |
|----|----|----|----|----|----|----|----|----|----|----|---|
| 0  | 1  | 2  | 3  | 4  | 5  | 6  | 7  | 8  | 9  | +  | - |
| 10 | 11 | 12 | 13 | 14 | 15 | 16 | 17 | 18 | 19 | 20 | = |